

Key to

Fractions[®]

3

Student
Workbook

Adding and Subtracting



By Steven Rasmussen

Name

Class

TABLE OF CONTENTS

| | |
|---|----|
| Simplifying Fractions Review | 1 |
| Multiplying Fractions Review | 2 |
| Reciprocals and Dividing Fractions Review | 3 |
| Adding Fractions on Number Lines | 4 |
| Subtracting Fractions on Number Lines | 6 |
| Adding Fractional Parts | 8 |
| Adding and Subtracting Fractions with Common Denominators | 9 |
| Adding, Subtracting, Multiplying and Dividing with Common Denominators | 13 |
| Multiples | 14 |
| Least Common Denominator | 16 |
| Finding the Least Common Denominator | 17 |
| Equal Fractions Review | 20 |
| Adding and Subtracting Fractions with Different Denominators | 21 |
| Word Problems | 28 |
| Finding the Least Common Denominator of Three Fractions | 32 |
| Adding Three Fractions with Different Denominators | 33 |
| Adding, Subtracting, Multiplying and Dividing with Different Denominators | 35 |
| Practice Test | 36 |

Fractions, as we write them and work with them today, were developed in India. The Hindus were the greatest masters of arithmetic in the ancient world. Equipped with a simple yet powerful system of writing numbers, the Hindus originated the rules for simplifying, multiplying, dividing, adding and subtracting fractions. They wrote their fractions with the numerator above the denominator as we do now but they did not use a fraction bar.

Although we know that Hindu fractions date back to at least 200A.D., the early history of work with fractions is not complete because few ancient Hindu books on mathematics have survived. Those books that have been found are mainly about astronomy and only incidentally include sections on arithmetic, geometry and algebra. They were written in Sanskrit verse and they used poetic names for numbers instead of number symbols. Early Hindu books were written on palm leaves before the invention of paper. Famous Hindu mathematicians included Aryabhata (500B.C.), Brahmagupta (650A.D.), Mahavira (850A.D.) and Bhaskara (1150A.D.).

If you were a young Hindu student who wanted to learn about fractions, you would first have to memorize all the fraction rules. When you could recite the rules perfectly, you would have to do many problems using the rules. In this booklet you will learn to add and subtract fractions. Brahmagupta wrote the rule for this well over 1000 years ago.

If the denominators of fractions are different, then reduce these fractions to a common denominator. Now, for the additions, unite the numerators and take their difference in case of subtraction.

If Brahmagupta's rule sounds confusing to you, don't worry. You don't have to memorize it. This book will make adding and subtracting fractions much clearer.



Cover Art by James Dykeman

On the cover of this booklet, a young Hindu student in the time of Brahmagupta is learning to work with fractions. He writes with his finger on a board covered with dust while his teacher looks on. The fraction on the board is $\frac{3}{4}$. Notice the teacher's book. It is written on a bundle of palm leaves.

IMPORTANT NOTICE: This book is sold as a student workbook and is *not* to be used as a duplicating master. No part of this book may be reproduced in any form without the prior written permission of the publisher. Copyright infringement is a violation of Federal Law.

Copyright © 1980 by Steve Rasmussen. All rights reserved.

® *Key to Fractions*, *Key to Decimals*, *Key to Percents*, *Key to Algebra*, *Key to Geometry*, *Key to Measurement*, and *Key to Metric Measurement* are registered trademarks of Key Curriculum Press.

Published by Key Curriculum Press, 1150 65th Street, Emeryville, CA 94608

Printed in the United States America

17 16

02

ISBN 0-913684-93-7

Simplifying Fractions Review

Sometimes after you add, subtract, multiply or divide fractions, you will be able to simplify your answer. To simplify a fraction, first find the greatest common factor (GCF) of the numerator and denominator and then divide both by the GCF.

Simplify.

GCF of 8 and 20 is 4.

$$\frac{8 \div 4}{20 \div 4} = \frac{2}{5}$$

GCF of 4 and 6 is ____.

$$\frac{4}{6} =$$

GCF of 9 and 12 is ____.

$$\frac{9}{12} =$$

GCF is ____.

$$\frac{5}{10} =$$

GCF is ____.

$$\frac{4}{16} =$$

GCF is ____.

$$\frac{8}{10} =$$

$$\frac{3}{15} =$$

$$\frac{12}{18} =$$

$$\frac{7}{14} =$$

Some of the fractions below are already in simplest form. Circle them. Simplify the others.

$$\frac{2}{6} = \frac{1}{3} \quad \left(\frac{8}{9} \right)$$

$$\frac{6}{6} = 1$$

$$\frac{10}{12}$$

$$\frac{1}{4}$$

$$\frac{5}{5}$$

$$\frac{9}{27}$$

$$\frac{7}{11}$$

$$\frac{10}{40}$$

$$\frac{20}{50}$$

$$\frac{2}{21}$$

$$\frac{3}{12}$$

$$\frac{6}{24}$$

$$\frac{10}{10}$$

$$\frac{4}{5}$$

$$\frac{14}{20}$$

$$\frac{15}{25}$$

$$\frac{1}{2}$$

$$\frac{9}{18}$$

$$\frac{18}{21}$$

Multiplying Fractions Review

It is easy to multiply fractions. You multiply their numerators together and multiply their denominators together.

Multiply.

$$\frac{1}{3} \times \frac{5}{8} =$$

$$\frac{2}{5} \times \frac{3}{5} =$$

$$\frac{1}{9} \times \frac{1}{4} =$$

$$\frac{6}{7} \times \frac{2}{5} =$$

$$\frac{3}{8} \times \frac{1}{2} =$$

$$\frac{2}{3} \times \frac{2}{7} =$$

Multiply and then simplify.

$$\frac{3}{5} \times \frac{1}{6} =$$

$$\frac{4}{5} \times \frac{5}{12} =$$

$$\frac{1}{2} \times \frac{4}{7} =$$

$$\frac{1}{4} \times \frac{8}{9} =$$

$$\frac{2}{3} \times \frac{3}{8} =$$

$$\frac{4}{5} \times \frac{1}{6} =$$

Simplify and then multiply. Find a numerator and a denominator with a common factor. Divide them by their common factor. Then multiply.

3 divides into 3.
3 divides into 6.

$$\frac{\cancel{3}}{5} \times \frac{1}{\cancel{6}_2} = \frac{1}{10}$$

$$\frac{1}{2} \times \frac{4}{7} =$$

$$\frac{2}{3} \times \frac{3}{8} =$$

$$\frac{4}{5} \times \frac{5}{12} =$$

$$\frac{1}{4} \times \frac{8}{9} =$$

$$\frac{4}{5} \times \frac{1}{6} =$$

Look carefully at the last two groups of problems. Same problems, same answers! Whether you multiply and then simplify or simplify and then multiply, your answer will be the same.

Reciprocals and Dividing Fractions Review

Two fractions whose product equals one are called reciprocals. Switch a fraction's numerator and denominator to find its reciprocal.

Find the reciprocal of each fraction.

$$\frac{3}{4}, \left(\frac{4}{3}\right) \quad \frac{5}{8}, \left(\quad\right) \quad \frac{2}{3}, \left(\quad\right) \quad \frac{25}{27}, \left(\quad\right) \quad \frac{1}{4}, \left(\quad\right)$$

To divide by a fraction, rewrite the problem as multiplication by the reciprocal of that fraction. Then multiply. Here are the steps:

1. Copy the first fraction.
2. Change division to multiplication.
3. Change the second fraction to its reciprocal.
4. Multiply.

$$\frac{3}{10} \div \frac{2}{3} = \frac{3}{10} \times \frac{3}{2} = \frac{9}{20}$$

$$\frac{5}{12} \div \frac{3}{5} =$$

$$\frac{2}{9} \div \frac{3}{4} =$$

$$\frac{1}{9} \div \frac{1}{4} =$$

$$\frac{2}{5} \div \frac{1}{2} =$$

$$\frac{4}{7} \div \frac{5}{6} =$$

After you rewrite the division problems below, simplify and then multiply.

$$\frac{3}{5} \div \frac{3}{4} = \frac{3}{5} \times \frac{4}{3} = \frac{4}{5}$$

$$\frac{1}{10} \div \frac{3}{5} =$$

$$\frac{1}{6} \div \frac{1}{2} =$$

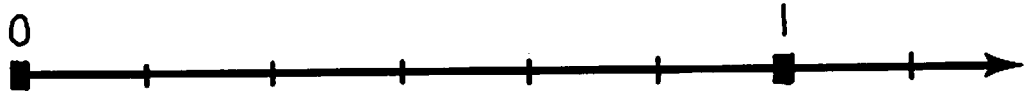
$$\frac{4}{9} \div \frac{2}{3} =$$

Adding Fractions on Number Lines

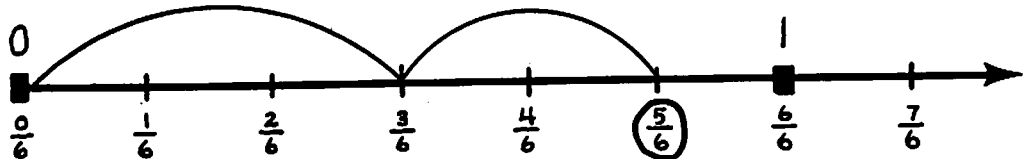
Here's an addition problem with sixths:

$$\frac{3}{6} + \frac{2}{6} =$$


Here's a number line divided into sixths:



Here's how to do the problem on the number line:



Here are the steps that you follow:



The place where you finish is the answer to the problem.

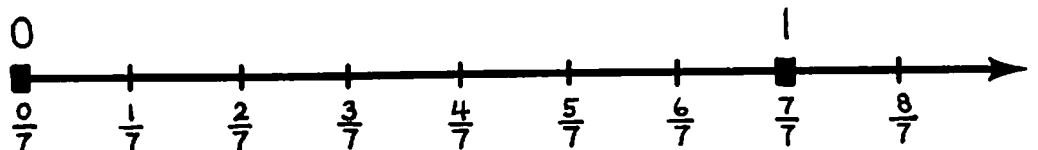
$$\frac{3}{6} + \frac{2}{6} = \frac{5}{6}$$

Below is a problem for you to do.


Here's an addition problem with sevenths:

$$\frac{4}{7} + \frac{2}{7} =$$

Do the problem on this number line.



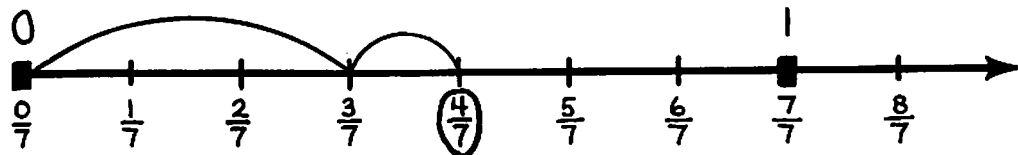
Here are the steps that you follow:



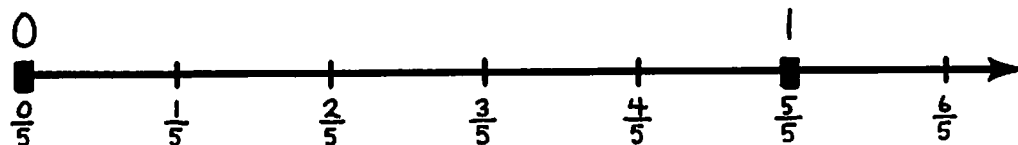
Add using the number lines. On each number line:

1. Start at 0.
2. Show a jump to the right for the first fraction.
3. Show a jump to the right for the second fraction.
4. Circle the fraction where you finish.

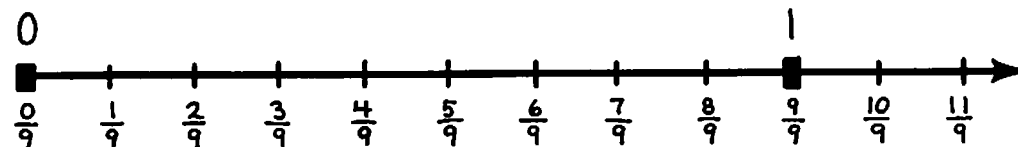
$$\frac{3}{7} + \frac{1}{7} = \frac{4}{7}$$



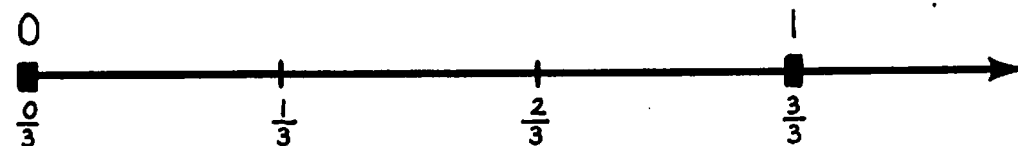
$$\frac{1}{5} + \frac{3}{5} =$$



$$\frac{4}{9} + \frac{4}{9} =$$



$$\frac{1}{3} + \frac{1}{3} =$$




Subtracting Fractions on Number Lines

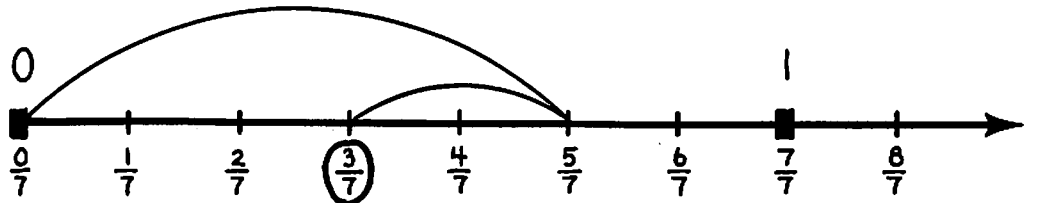
Here's a subtraction problem with sevenths:

$$\frac{5}{7} - \frac{2}{7} =$$

Here's a number line divided into sevenths:



Here's how to do the problem on the number line:



Here are the steps that you follow:

Start at 0. Jump five sevenths to the right. Jump two sevenths to the left. End up at $\frac{3}{7}$.

The place where you finish is the answer to the problem.

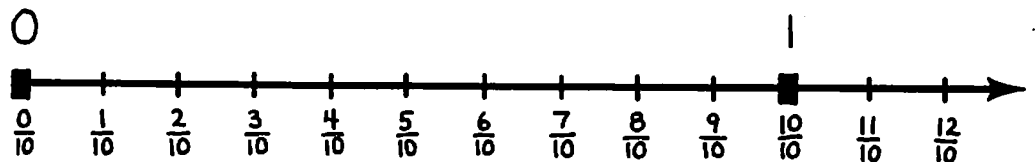
$$\frac{5}{7} - \frac{2}{7} = \frac{3}{7}$$

Below is a problem for you to do.

Here's a subtraction problem with tenths:

$$\frac{9}{10} - \frac{2}{10} =$$

Do the problem on this number line.



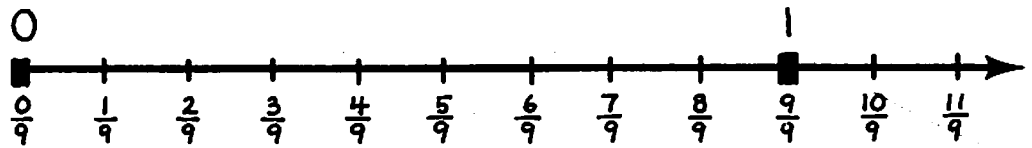
Here are the steps that you follow:

Start at 0. Jump nine tenths to the right. Jump two tenths to the left. Circle the fraction where you finish. It is the answer.

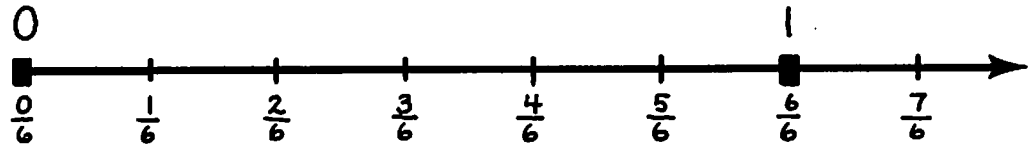
Subtract using the number lines. On each number line:

1. Start at 0.
2. Show a jump to the right for the first fraction.
3. Show a jump to the left for the second fraction.
4. Circle the fraction where you finish.

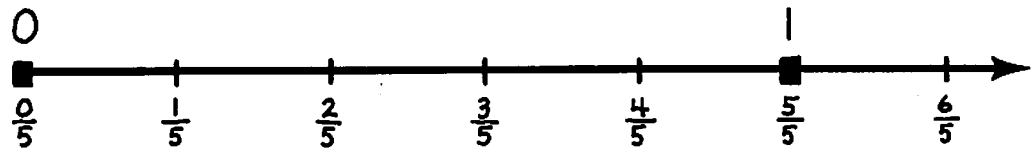
$$\frac{7}{9} - \frac{2}{9} =$$



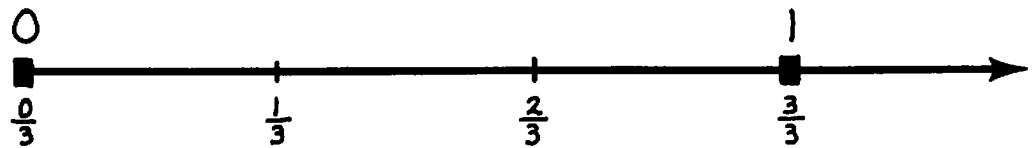
$$\frac{5}{6} - \frac{1}{6} =$$



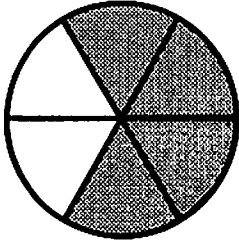
$$\frac{4}{5} - \frac{3}{5} =$$



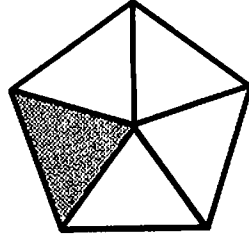
$$\frac{2}{3} - \frac{2}{3} =$$




Adding Fractional Parts



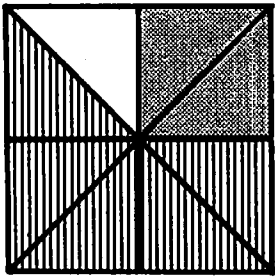
$$\frac{4}{6} + \frac{2}{6} = \frac{6}{6}$$



$$\frac{1}{5} + \frac{0}{5} = \frac{1}{5}$$



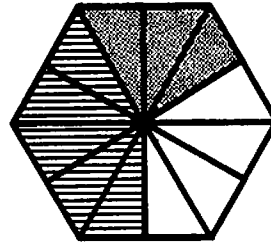
$$\frac{4}{6} + \frac{2}{6} = \frac{6}{6}$$



$$\frac{1}{8} + \frac{0}{8} = \frac{1}{8}$$

$$\frac{0}{8} + \frac{1}{8} = \frac{1}{8}$$


$$\frac{1}{8} + \frac{0}{8} + \frac{1}{8} = \frac{2}{8}$$



$$\frac{1}{12} + \frac{1}{12} = \frac{2}{12}$$

$$\frac{0}{12} + \frac{1}{12} = \frac{1}{12}$$

$$\frac{1}{12} + \frac{0}{12} + \frac{1}{12} = \frac{2}{12}$$



$$\frac{4}{16} + \frac{0}{16} = \frac{4}{16}$$

$$\frac{4}{16} + \frac{0}{16} + \frac{2}{16} = \frac{6}{16}$$

$$\frac{4}{16} + \frac{2}{16} + \frac{2}{16} = \frac{8}{16}$$

$$\frac{4}{16} + \frac{4}{16} = \frac{8}{16}$$

$$\frac{4}{16} + \frac{0}{16} + \frac{2}{16} + \frac{2}{16} = \frac{8}{16}$$

$$\frac{4}{16} + \frac{0}{16} + \frac{2}{16} + \frac{2}{16} + \frac{2}{16} = \frac{10}{16}$$

Adding and Subtracting Fractions with Common Denominators

If fractions have the same denominator they have a common denominator. It is easy to add and subtract fractions with a common denominator.

Put a loop around each problem below where the fractions have a common denominator.

$$\frac{1}{3} + \frac{1}{3} =$$

$$\frac{7}{9} - \frac{3}{5} =$$

$$\frac{3}{11} + \frac{8}{11} =$$

$$\frac{20}{17} + \frac{20}{13} =$$

$$\frac{4}{7} + \frac{1}{7} + \frac{1}{7} =$$

$$\frac{5}{17} - \frac{5}{20} =$$

$$\frac{2}{3} + \frac{5}{8} =$$

$$\frac{6}{5} - \frac{1}{6} =$$

$$\frac{1}{12} - \frac{1}{12} =$$

$$\frac{5}{7} - \frac{1}{4} =$$

$$\frac{6}{5} + \frac{1}{8} =$$

$$\frac{1}{4} + \frac{1}{4} + \frac{1}{4} =$$

When you add or subtract fractions with a common denominator, you add or subtract the numerators and keep the common denominator in your answer.

$$\frac{2}{5} + \frac{1}{5} = \frac{2+1}{5} = \frac{3}{5} \quad \begin{array}{l} \leftarrow \text{add numerators} \\ \leftarrow \text{keep the common denominator} \end{array}$$

$$\frac{2}{5} - \frac{1}{5} = \frac{2-1}{5} = \frac{1}{5} \quad \begin{array}{l} \leftarrow \text{subtract numerators} \\ \leftarrow \text{keep the common denominator} \end{array}$$

Add or subtract.

$$\frac{1}{3} + \frac{1}{3} = \frac{2}{3}$$

$$\frac{2}{7} + \frac{4}{7} =$$

$$\frac{7}{9} - \frac{5}{9} =$$

$$\frac{3}{5} + \frac{1}{5} =$$

$$\frac{4}{15} - \frac{2}{15} =$$

$$\frac{6}{35} + \frac{6}{35} =$$

$$\frac{5}{21} + \frac{8}{21} =$$

$$\frac{10}{21} - \frac{8}{21} =$$

$$\frac{6}{7} - \frac{2}{7} =$$

$$\frac{3}{11} - \frac{2}{11} =$$

$$\frac{8}{17} - \frac{3}{17} - \frac{2}{17} =$$

$$\frac{2}{13} + \frac{4}{13} + \frac{5}{13} =$$

Addition and subtraction problems can be written in two ways.

$$\frac{4}{7} + \frac{2}{7} = \frac{6}{7}$$

$$\begin{array}{r} \frac{4}{7} \\ + \frac{2}{7} \\ \hline \frac{6}{7} \end{array}$$

$$\frac{4}{7} - \frac{2}{7} = \frac{2}{7}$$

$$\begin{array}{r} \frac{4}{7} \\ - \frac{2}{7} \\ \hline \frac{2}{7} \end{array}$$

Add or subtract.

$$\begin{array}{r} \frac{4}{9} \\ + \frac{1}{9} \\ \hline \end{array}$$

$$\begin{array}{r} \frac{9}{13} \\ - \frac{5}{13} \\ \hline \end{array}$$

$$\begin{array}{r} \frac{2}{11} \\ + \frac{6}{11} \\ \hline \end{array}$$

$$\frac{4}{25} + \frac{17}{25} + \frac{3}{25} =$$

$$\frac{10}{11} - \frac{8}{11} =$$

$$\begin{array}{r} \frac{4}{15} \\ - \frac{2}{15} \\ \hline \end{array}$$

$$\begin{array}{r} \frac{1}{7} \\ + \frac{1}{7} \\ \hline \end{array}$$

$$\begin{array}{r} \frac{8}{9} \\ - \frac{1}{9} \\ \hline \end{array}$$

$$\frac{1}{7} + \frac{2}{7} + \frac{2}{7} + \frac{1}{7} =$$

$$\frac{15}{19} - \frac{7}{19} =$$

The problems below combine addition and subtraction. Add or subtract from left to right.

$$\frac{5}{7} + \frac{2}{7} - \frac{4}{7} = \frac{3}{7}$$

$$\frac{12}{13} - \frac{8}{13} + \frac{3}{13} =$$

$$\frac{7}{8} - \frac{3}{8} + \frac{3}{8} =$$

$$\frac{4}{5} - \frac{2}{5} + \frac{1}{5} =$$

$$\frac{5}{8} - \frac{3}{8} + \frac{1}{8} =$$

$$\frac{3}{11} + \frac{4}{11} - \frac{1}{11} + \frac{2}{11} =$$

$$\frac{11}{16} - \frac{1}{16} + \frac{5}{16} =$$

$$\frac{11}{28} - \frac{9}{28} + \frac{17}{28} =$$

$$\frac{3}{5} + \frac{4}{5} - \frac{2}{5} - \frac{1}{5} =$$

After you add or subtract fractions, always check to see if you can simplify your answer.

$$\frac{1}{4} + \frac{1}{4} = \frac{2}{4} = \frac{1}{2}$$

$$\frac{7}{8} - \frac{1}{8} = \frac{6}{8} = \frac{3}{4}$$

Add or subtract. Simplify each answer.

$$\frac{1}{6} + \frac{1}{6} =$$

$$\frac{5}{8}$$

$$\frac{5}{6}$$

$$\frac{2}{9} + \frac{4}{9} =$$

$$- \frac{1}{8}$$

$$- \frac{1}{6}$$

$$\frac{4}{8} = \frac{1}{2}$$

$$\frac{5}{12} + \frac{1}{12} =$$

$$\frac{11}{12}$$

$$\frac{3}{4}$$

$$\frac{3}{8} + \frac{5}{8} =$$

$$- \frac{1}{12}$$

$$- \frac{1}{4}$$

$$\frac{1}{18} + \frac{1}{18} =$$

$$\frac{7}{16}$$

$$\frac{8}{9}$$

$$\frac{4}{15} + \frac{8}{15} =$$

$$- \frac{3}{16}$$

$$- \frac{2}{9}$$

$$\frac{1}{10} + \frac{7}{10} =$$

$$\frac{15}{22} + \frac{3}{22} =$$

$$\frac{1}{18} + \frac{7}{18} - \frac{5}{18} + \frac{7}{18} - \frac{1}{18} =$$

Add or subtract. Express your answer in simplest form.

$$\frac{7}{12} - \frac{1}{12} =$$

$$\frac{1}{8}$$

$$\frac{13}{24}$$

$$\frac{5}{13} + \frac{6}{13} =$$

$$+ \frac{5}{8}$$

$$+ \frac{5}{24}$$

$$\frac{2}{21} + \frac{5}{21} =$$

$$\frac{9}{11}$$

$$\frac{49}{50}$$

$$\frac{8}{15} - \frac{4}{15} =$$

$$- \frac{1}{11}$$

$$- \frac{9}{50}$$

$$\frac{5}{9} - \frac{2}{9} =$$

$$\frac{6}{35}$$

$$\frac{3}{16}$$

$$\frac{7}{9} - \frac{5}{9} =$$

$$\frac{6}{35}$$

$$\frac{3}{16}$$

$$\frac{1}{25} + \frac{8}{25} + \frac{6}{25} =$$

$$+ \frac{13}{35}$$

$$+ \frac{3}{16}$$

$$\frac{7}{15} + \frac{4}{15} - \frac{11}{15} =$$

$$\frac{7}{20} + \frac{7}{20} - \frac{1}{20} - \frac{1}{20} =$$

$$\frac{9}{10} - \frac{7}{10} + \frac{3}{10} =$$

$$\frac{1}{12} + \frac{1}{12} + \frac{5}{12} + \frac{5}{12} =$$

Adding, Subtracting, Multiplying and Dividing with Common Denominators

$$\frac{7}{9} - \frac{2}{9} =$$

$$\frac{7}{9} + \frac{2}{9} =$$

$$\frac{7}{9} \times \frac{2}{9} =$$

$$\frac{2}{5} \times \frac{2}{5} =$$

$$\frac{2}{5} + \frac{2}{5} =$$

$$\frac{2}{5} - \frac{2}{5} =$$

$$\frac{2}{7} \div \frac{4}{7} =$$

$$\frac{2}{7} + \frac{4}{7} =$$

$$\frac{1}{6} \div \frac{5}{6} =$$

$$\frac{1}{6} \times \frac{5}{6} =$$

Are all your answers in simplest form?

Most of the problems below use parentheses. Parentheses mean "Do me first."
If a problem has parentheses:

1. Do what's in the parentheses first.
2. Write the answer above.
3. Complete the problem.

$$\frac{7}{9} - \left(\frac{1}{9} + \frac{1}{9} \right) = \frac{5}{9}$$

$$\frac{7}{9} - \frac{1}{9} + \frac{1}{9} =$$

$$\frac{6}{7} - \left(\frac{3}{7} - \frac{2}{7} \right) =$$

$$\frac{6}{7} - \frac{3}{7} - \frac{2}{7} =$$

$$\left(\frac{4}{11} + \frac{4}{11} \right) \times \frac{1}{3} =$$

$$\left(\frac{4}{11} \times \frac{1}{3} \right) + \left(\frac{4}{11} \times \frac{1}{3} \right) =$$

$$\frac{2}{3} \times \left(\frac{2}{5} - \frac{1}{5} \right) =$$

$$\left(\frac{2}{3} \times \frac{2}{5} \right) - \left(\frac{2}{3} \times \frac{1}{5} \right) =$$

Multiples

A multiplication table is a table of multiples. Finish the table of multiples.

| X | 1 | 2 | 3 | 4 | 5 | 6 | 7 | 8 | 9 | 10 |
|----|----|----|----|----|----|----|---|----|----|-----|
| 1 | 1 | 2 | 3 | 4 | 5 | 6 | 7 | 8 | 9 | 10 |
| 2 | 2 | 4 | 6 | | 10 | 12 | | | | |
| 3 | 3 | 6 | | | 15 | 18 | | | | |
| 4 | 4 | 8 | 12 | | | | | 32 | 36 | 40 |
| 5 | 5 | 10 | 15 | | | | | 40 | 45 | 50 |
| 6 | 6 | 12 | 18 | 24 | | | | | 54 | 60 |
| 7 | 7 | 14 | 21 | 28 | 35 | | | | | 70 |
| 8 | 8 | 16 | 24 | | | | | 64 | 72 | 80 |
| 9 | 9 | 18 | 27 | | | | | 72 | 81 | 90 |
| 10 | 10 | 20 | 30 | 40 | | | | | 90 | 100 |

The first ten multiples of 2 are: 2, 4, 6, __, __, __, __, __, __, __

The first ten multiples of 4 are: __, __, __, __, __, __, __, __, __, __

The first ten multiples of 6 are: __, __, __, __, __, __, __, __, __, __

The first ten multiples of 8 are: __, __, __, __, __, __, __, __, __, __

The first eight multiples of 9 are: __, __, __, __, __, __, __, __

The first eight multiples of 12 are: __, __, __, __, __, __, __, __

The first two multiples of 15 are: __, __

The first multiple of 20 is: __

Look at the multiples of 4 and 6. Can you find three numbers that are multiples of both 4 and 6? Circle them. They are __, __, __.
4 and 6 have these multiples in common. They are the first three common multiples of 4 and 6.

Find two common multiples of 9 and 12. __, __

The smallest common multiple of two numbers is called their least common multiple.

List the first multiples of 10: 10, 20, 30, 40, 50, 60, 70, 80, 90, 100

List the first multiples of 4: 4, 8, 12, 16, 20, 24, 28, 32, 36, 40

Circle the common multiples of 10 and 4. The least common multiple is 20.

List the first multiples of 5: __, __, __, __, __, __, __, __, __, __, __

List the first multiples of 3: __, __, __, __, __, __, __, __, __, __, __

Circle the common multiples of 5 and 3. The least common multiple is __.

List the first multiples of 8: __, __, __, __, __, __, __, __, __, __, __

List the first multiples of 4: __, __, __, __, __, __, __, __, __, __, __

Circle the common multiples of 8 and 4. The least common multiple is __.

List the first multiples of 7: __, __, __, __, __, __, __, __, __, __, __

List the first multiples of 5: __, __, __, __, __, __, __, __, __, __, __

Circle the common multiples of 7 and 5. The least common multiple is __.

Here are multiples of 9: 9, 18, 27, 36, 45, 54, 63, 72, 81, 90

Are they multiples of 6? no, yes, no, __, __, __, __, __, __, __, __

What are the common multiples of 9 and 6? 18, __, __, __, __

The least common multiple of 9 and 6 is __.

Here are multiples of 7: 7, 14, 21, 28, 35, 42, 49, 56, 63, 70

Are they multiples of 3? __, __, __, __, __, __, __, __, __, __, __

What are the common multiples of 7 and 3? __, __, __

The least common multiple of 7 and 3 is __.

Least Common Denominator

You know how to add and subtract fractions with a common denominator. It is harder to add and subtract fractions with different denominators.

Put a loop around each problem below where the fractions have different denominators. Add or subtract the fractions with a common denominator.

$$\begin{array}{r} \frac{1}{6} + \frac{3}{4} = \\ \hline \end{array}$$

$$\frac{6}{7} - \frac{1}{3} =$$

$$\frac{5}{8} - \frac{1}{2} =$$

$$\frac{3}{11} + \frac{1}{11} + \frac{5}{11} =$$

$$\frac{3}{5} + \frac{1}{5} =$$

$$\frac{3}{4} - \frac{1}{4} =$$

$$\frac{7}{12} - \frac{3}{8} =$$

$$\frac{5}{7} - \frac{4}{7} =$$

The first step in completing the looped problems above is to find the least common multiple of the denominators. We call this the least common denominator (LCD).

Find the least common denominator of each pair of fractions below.

$$\frac{\quad}{6} + \frac{\quad}{4}$$

List each multiple of 6: _____, _____

Is this a multiple of 4? _____, _____

The least common multiple of 6 and 4 is _____.

The least common denominator is _____.

$$\frac{\quad}{7} - \frac{\quad}{3}$$

List each multiple of 7: _____, _____, _____

Is this a multiple of 3? _____, _____, _____

The least common multiple of 7 and 3 is _____.

The least common denominator is _____.

$$\frac{\quad}{8} - \frac{\quad}{2}$$

List each multiple of 8: _____

Is this a multiple of 2? _____

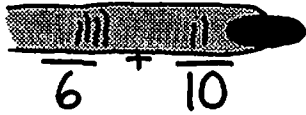
The least common multiple of 8 and 2 is _____.

The least common denominator is _____.

Finding the Least Common Denominator

Here is a way to find the least common denominator of two fractions:

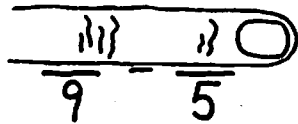
1. Pick the larger denominator.
2. Start listing its multiples. (Remember that the first multiple is the number itself.)
3. After you list each multiple ask, "Is this also a multiple of the smaller denominator?"
4. As soon as you answer "yes," stop. You have found the least common denominator.



List each multiple of 10: 10, 20, 30

Is this a multiple of 6? no, no, yes

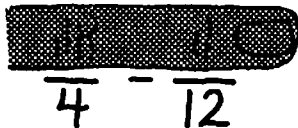
LCD is 30.



List each multiple of 9: _____, _____, _____, _____, _____

Is this a multiple of 5? _____, _____, _____, _____, _____

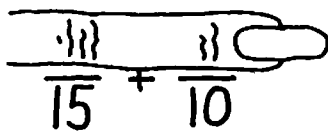
LCD is _____.



List each multiple of the larger denominator: _____

Is this a multiple of the smaller denominator? _____

LCD is _____.



List each multiple of the larger denominator: _____, _____

Is this a multiple of the smaller denominator? _____, _____

LCD is _____.

List each multiple of the larger: _____, _____

Is this a multiple of the smaller? _____, _____



$$\frac{4}{4} + \frac{11}{14}$$

LCD is _____.

List each multiple of the larger: _____

Is this a multiple of the smaller? _____




$$\frac{21}{21} + \frac{1}{7}$$

LCD is _____.

List each multiple of the larger: _____, _____, _____

Is this a multiple of the smaller? _____, _____, _____




$$\frac{3}{3} + \frac{5}{8}$$

LCD is _____.

List each multiple of the larger: _____, _____, _____

Is this a multiple of the smaller? _____, _____, _____

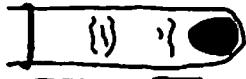


$$\frac{15}{15} - \frac{6}{9}$$

LCD is _____.

List each multiple of the larger: _____, _____, _____

Is this a multiple of the smaller? _____, _____, _____




$$\frac{14}{14} - \frac{8}{6}$$

LCD is _____.

List each multiple of the larger: _____

Is this a multiple of the smaller? _____




$$\frac{5}{5} - \frac{3}{2}$$

LCD is _____.

List each multiple of the larger: _____

Is this a multiple of the smaller? _____




$$\frac{4}{4} - \frac{4}{8}$$

LCD is _____.

List each multiple of the larger: _____


Is this a multiple of the smaller? _____



$$\frac{4}{4} + \frac{7}{11}$$

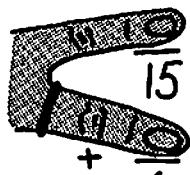
LCD is _____.

List multiples of the larger denominator. Stop when you find one that's also a multiple of the smaller denominator.



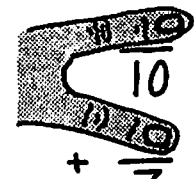
$$\frac{6}{6} - \frac{1}{3}$$

LCD is _____.




$$\frac{15}{15} + \frac{1}{6}$$

LCD is _____.




$$\frac{10}{10} + \frac{1}{7}$$

LCD is _____.



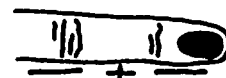
$$\frac{3}{3} + \frac{9}{12}$$

LCD is _____.



$$\frac{4}{4} - \frac{6}{10}$$

LCD is _____.



$$\frac{8}{8} + \frac{1}{6}$$

LCD is _____.

Sometimes the LCD will be one of the given denominators.

$$\frac{\quad}{9} + \frac{\quad}{3}$$

LCD is ____.

$$\frac{\quad}{5} + \frac{\quad}{15}$$

LCD is ____.

$$\frac{\quad}{2} + \frac{\quad}{4}$$

LCD is ____.

$$\frac{\quad}{2} - \frac{\quad}{6}$$

LCD is ____.

Sometimes the LCD will be larger than either given denominator but smaller than their product.

$$\frac{\quad}{12} + \frac{\quad}{9}$$

LCD is ____.

$$\frac{\quad}{10} - \frac{\quad}{8}$$

LCD is ____.

$$\frac{\quad}{20} - \frac{\quad}{6}$$

LCD is ____.

$$\frac{\quad}{16} + \frac{\quad}{12}$$

LCD is ____.

Sometimes the LCD will be the product of the given denominators.

$$\frac{\quad}{3} + \frac{\quad}{11}$$

LCD is ____.

$$\frac{\quad}{7} - \frac{\quad}{4}$$

LCD is ____.

LCD is short for _____.

Equal Fractions Review

$$\frac{2}{5} = \frac{\quad}{15}$$

What numerator will make the fraction equal $\frac{2}{5}$?

If you multiply the numerator and denominator of a fraction by the same number (not zero), you will make an equal fraction.

$$\frac{2 \times 3}{5 \times 3} = \frac{6}{15}$$

First figure out what the denominator of $\frac{2}{5}$ was multiplied by and then multiply the numerator by the same number.

Make equal fractions.

$$\frac{1}{7} = \frac{\quad}{28}$$

$$\frac{3}{4} = \frac{\quad}{8}$$

$$\frac{2}{5} = \frac{\quad}{15}$$

$$\frac{1}{2} = \frac{\quad}{12}$$

$$\frac{2}{5} = \frac{\quad}{10}$$

$$\frac{1}{3} = \frac{\quad}{9}$$

$$\frac{1}{2} = \frac{\quad}{20}$$

$$\frac{5}{8} = \frac{\quad}{32}$$

$$\frac{3}{7} = \frac{\quad}{35}$$

$$\frac{1}{6} = \frac{\quad}{12}$$

$$\frac{1}{4} = \frac{\quad}{24}$$

$$\frac{3}{10} = \frac{\quad}{50}$$

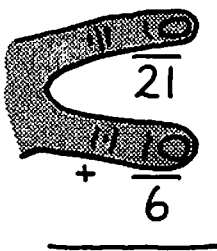
$$\frac{2}{3} = \frac{\quad}{3}$$

$$\frac{1}{10} = \frac{\quad}{10}$$

$$\frac{3}{8} = \frac{\quad}{8}$$

$$\frac{5}{9} = \frac{\quad}{9}$$

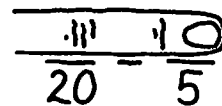
Don't forget how to find the least common denominator.



$$\begin{array}{r} 21 \\ + \quad 6 \\ \hline \end{array}$$

List each multiple of the larger: $\underline{\quad}, \underline{\quad}$
Is this a multiple of the smaller? $\underline{\quad}, \underline{\quad}$

LCD is $\underline{\quad}$.



$$\begin{array}{r} 20 \\ - \quad 5 \\ \hline \end{array}$$

LCD is $\underline{\quad}$.


Adding and Subtracting Fractions with Different Denominators

Step 1

Find the least common denominator.

LCD is 15.

$$\begin{array}{r} \frac{3}{5} \\ + \frac{2}{15} \\ \hline \end{array}$$



$$\begin{array}{r} \frac{3}{5} \\ + \frac{2}{15} \\ \hline \end{array}$$

Step 2

Rename both fractions using the LCD.

$$\begin{array}{r} \frac{3}{5} = \frac{\quad}{15} \\ + \frac{2}{15} = \frac{\quad}{15} \\ \hline \end{array}$$

Step 3

Find the missing numerators to make equal fractions.

$$\begin{array}{r} \frac{3 \times 3}{5 \times 3} = \frac{9}{15} \\ + \frac{2 \times 1}{15 \times 1} = \frac{2}{15} \\ \hline \end{array}$$

Step 4

Add or subtract fractions with a common denominator.

$$\begin{array}{r} \frac{3 \times 3}{5 \times 3} = \frac{9}{15} \\ + \frac{2 \times 1}{15 \times 1} = \frac{2}{15} \\ \hline \frac{11}{15} \end{array}$$

Add or subtract. Follow the four steps above to complete each problem. Each LCD on this page is one of the given denominators.

LCD is 8.

$$\begin{array}{r} \frac{3 \times 1}{8 \times 1} = \frac{3}{8} \\ - \frac{1 \times 2}{4 \times 2} = \frac{2}{8} \\ \hline \frac{1}{8} \end{array}$$

LCD is ____.

$$\begin{array}{r} \frac{2}{3} \\ - \frac{7}{12} \\ \hline \end{array}$$

LCD is ____.

$$\begin{array}{r} \frac{4}{5} \\ + \frac{1}{10} \\ \hline \end{array}$$

LCD is ____.

$$\begin{array}{r} \frac{5}{7} \\ + \frac{1}{14} \\ \hline \end{array}$$

LCD is ____.

$$\begin{array}{r} \frac{5}{12} \\ - \frac{1}{3} \\ \hline \end{array}$$

LCD is ____.

$$\begin{array}{r} \frac{1}{6} \\ + \frac{2}{3} \\ \hline \end{array}$$

Step 1

Find the least common denominator.

Step 2

Rename both fractions using the LCD.

Step 3

Find the missing numerators to make equal fractions.

Step 4

Add or subtract fractions with a common denominator.

Add or subtract. Each LCD on this page is larger than either given denominator but smaller than their product.

LCD is 20.

$$\frac{1 \times 2}{10 \times 2} = \frac{2}{20}$$

$$+ \frac{3 \times 5}{4 \times 5} = \frac{15}{20}$$

$$\frac{17}{20}$$

$$\frac{1}{6}$$

$$+ \frac{5}{9}$$

$$\frac{9}{14}$$

$$- \frac{1}{4}$$

$$\frac{11}{15}$$

$$- \frac{3}{10}$$

$$\frac{1}{4}$$

$$- \frac{1}{10}$$

$$\frac{3}{4}$$

$$+ \frac{1}{6}$$

$$\frac{2}{9}$$

$$+ \frac{5}{12}$$

$$\frac{3}{8}$$

$$- \frac{1}{6}$$

$$\frac{5}{8}$$

$$- \frac{7}{12}$$

Each LCD on this page is the product of the given denominators.

LCD is 42.

$$\frac{2 \times 6}{7 \times 6} = \frac{12}{42}$$

$$+ \frac{1 \times 7}{6 \times 7} = \frac{7}{42}$$

$$\frac{19}{42}$$

$$\frac{2}{3}$$

$$+ \frac{1}{4}$$

$$\frac{5}{8}$$

$$- \frac{1}{5}$$

$$\frac{4}{5}$$

$$+ \frac{1}{7}$$

$$\frac{1}{2}$$

$$- \frac{2}{9}$$

$$\frac{3}{5}$$

$$- \frac{1}{3}$$

$$\frac{7}{8}$$

$$- \frac{2}{3}$$

$$\frac{1}{5}$$

$$+ \frac{3}{4}$$

$$\frac{1}{6}$$

$$+ \frac{2}{5}$$

$$\frac{4}{7}$$

$$- \frac{1}{2}$$

$$\frac{1}{5}$$

$$+ \frac{1}{9}$$

$$\frac{5}{6}$$

$$- \frac{1}{7}$$

Circle the multiples of 3. 1, 2, 3, 4, 5, 6, 7, 8, 9, 10

Circle two fractions with a common denominator.

$\frac{6}{8}$, $\frac{9}{12}$, $\frac{1}{4}$, $\frac{3}{7}$, $\frac{4}{4}$, $\frac{4}{3}$

Circle the least common multiple of 8 and 2.

1, 2, 4, 8, 16, 32

Circle two fractions with the same numerator but with different denominators.

$\frac{2}{7}$, $\frac{3}{7}$, $\frac{4}{5}$, $\frac{1}{3}$, $\frac{2}{5}$, $\frac{5}{4}$

Circle the LCD of $\frac{5}{8}$ and $\frac{1}{9}$.

3, 6, 9, 18, 36, 54

Add or subtract.

$$\begin{array}{r} \frac{1}{4} \\ + \frac{2}{9} \\ \hline \end{array}$$

$$\begin{array}{r} \frac{11}{12} \\ - \frac{1}{3} \\ \hline \end{array}$$

$$\begin{array}{r} \frac{1}{4} \\ + \frac{3}{10} \\ \hline \end{array}$$

$$\begin{array}{r} \frac{6}{11} \\ - \frac{1}{2} \\ \hline \end{array}$$

$$\begin{array}{r} \frac{7}{9} \\ + \frac{1}{6} \\ \hline \end{array}$$

$$\begin{array}{r} \frac{1}{3} \\ - \frac{2}{7} \\ \hline \end{array}$$

$$\begin{array}{r} \frac{1}{3} \\ + \frac{4}{9} \\ \hline \end{array}$$

$$\begin{array}{r} \frac{4}{5} \\ - \frac{3}{4} \\ \hline \end{array}$$

$$\begin{array}{r} \frac{3}{4} \\ + \frac{1}{6} \\ \hline \end{array}$$

| | | |
|--|--|---|
| <p>Add $\frac{5}{6}$ and $\frac{1}{8}$.</p> $\frac{5 \times 4}{6 \times 4} = \frac{20}{24}$ $+ \frac{1 \times 3}{8 \times 3} = \frac{3}{24}$ <hr/> $\frac{23}{24}$ | <p>Find the sum of $\frac{3}{7}$ and $\frac{1}{21}$.</p> | <p>Subtract $\frac{2}{5}$ from $\frac{5}{7}$.</p> |
| <p>$\frac{2}{5}$ is larger than $\frac{1}{4}$. What is the difference?</p> | <p>Add $\frac{1}{3}$ and $\frac{2}{9}$.</p> | <p>Find the sum of $\frac{1}{8}$ and $\frac{2}{3}$.</p> |
| <p>How much more is $\frac{2}{7}$ than $\frac{1}{4}$?</p> | <p>Subtract $\frac{1}{3}$ from $\frac{4}{5}$.</p> | <p>Add $\frac{1}{3}$ and $\frac{1}{4}$.</p> |
| <p>Find the sum of $\frac{3}{7}$ and $\frac{1}{4}$.</p> | <p>What is $\frac{6}{7}$ minus $\frac{1}{3}$?</p> | <p>What is $\frac{3}{4}$ plus $\frac{1}{8}$?</p> |

Add or subtract. Then simplify your answer.

$$\begin{array}{r} \frac{3 \times 1}{10 \times 1} = \frac{3}{10} \\ + \frac{1 \times 5}{2 \times 5} = \frac{5}{10} \\ \hline \frac{8}{10} = \frac{4}{5} \end{array}$$

$$\begin{array}{r} \frac{5}{6} \\ - \frac{1}{12} \\ \hline \end{array}$$

$$\begin{array}{r} \frac{5}{24} \\ + \frac{3}{8} \\ \hline \end{array}$$

$$\begin{array}{r} \frac{9}{10} \\ - \frac{1}{15} \\ \hline \end{array}$$

$$\begin{array}{r} \frac{7}{10} \\ + \frac{1}{6} \\ \hline \end{array}$$

$$\begin{array}{r} \frac{11}{15} \\ - \frac{1}{3} \\ \hline \end{array}$$

$$\begin{array}{r} \frac{1}{20} \\ + \frac{1}{30} \\ \hline \end{array}$$

$$\begin{array}{r} \frac{5}{6} \\ - \frac{1}{3} \\ \hline \end{array}$$

Chris took the quiz below. Put **C** or **X** by each problem Chris did.

| | <i>Chris</i> | | |
|-----------------------|---|--|--|
| | <i>Quiz</i> | | |
| <input type="radio"/> | $\frac{3 \times 2}{7 \times 2} = \frac{6}{14}$ $+ \frac{3 \times 1}{14 \times 1} = \frac{3}{14}$ <hr/> $\frac{9}{14}$ | $\frac{2 \times 3}{5 \times 3} = \frac{6}{15}$ $- \frac{1 \times 5}{3 \times 5} = \frac{5}{15}$ <hr/> $\frac{11}{15}$ | $\frac{5 \times 4}{9 \times 4} = \frac{20}{36}$ $- \frac{1 \times 9}{4 \times 9} = \frac{9}{36}$ <hr/> $\frac{11}{36}$ |
| | C | X | |
| | | <i>subtraction, not addition</i> | |
| <input type="radio"/> | $\frac{3 \times 1}{10 \times 1} = \frac{3}{10}$ $+ \frac{1 \times 2}{5 \times 2} = \frac{1}{10}$ <hr/> $\frac{4}{10} = \frac{2}{5}$ | $\frac{3 \times 6}{5 \times 6} = \frac{18}{30}$ $+ \frac{1 \times 5}{6 \times 5} = \frac{5}{30}$ <hr/> $\frac{23}{30}$ | $\frac{5 \times 2}{12 \times 2} = \frac{10}{24}$ $- \frac{1 \times 3}{8 \times 3} = \frac{3}{24}$ <hr/> $\frac{7}{24}$ |
| <input type="radio"/> | $\frac{1 \times 6}{2 \times 6} = \frac{6}{12}$ $- \frac{1 \times 2}{8 \times 2} = \frac{2}{12}$ <hr/> $\frac{4}{12} = \frac{1}{3}$ | $\frac{1}{4}$ $+ \frac{1}{4}$ <hr/> $\frac{2}{4} = \frac{1}{2}$ | $\frac{1}{6}$ $+ \frac{3}{4}$ <hr/> $\frac{4}{10}$ |

There are 4 mistakes on Chris's paper.

Word Problems

Answer each question below. Follow these four steps:

1. Read the problem.
2. Write it as addition or subtraction of two fractions.
3. Add or subtract.
4. State your answer in a sentence.

Pat and Sandy got a job painting a shed. The first morning they painted $\frac{1}{3}$ of the shed. In the afternoon they painted $\frac{1}{4}$ of the shed. What fraction of the shed did they paint on the first day?

Problem:

$$\begin{array}{r} \frac{1 \times 4}{3 \times 4} = \frac{4}{12} \\ + \frac{1 \times 3}{4 \times 3} = \frac{3}{12} \\ \hline \frac{7}{12} \end{array}$$

Answer: They painted $\frac{7}{12}$ of the shed.

The second morning Pat walked $\frac{3}{10}$ of a kilometer to the Paint Spot paint store and then $\frac{7}{10}$ of a kilometer to work. How far did Pat walk?

Problem:

Answer:

Pat and Sandy took a break for lunch. They spent $\frac{1}{2}$ of an hour resting and $\frac{1}{3}$ of an hour eating. What fraction of an hour was their break?

Problem:

Answer:

Pat needed more brushes. Pat knew that the Paint Spot was $\frac{7}{10}$ of a kilometer away. Sandy said, "People's Paint Store is $\frac{3}{10}$ of a kilometer closer." How far away was People's Paint Store?

Answer:

Problem:

Sandy brought a large bottle of soda to work. It was $\frac{3}{4}$ full. At noon it was only $\frac{1}{4}$ full. How much of the bottle did Sandy drink before noon?

Answer:

Problem:

Pat had $\frac{2}{3}$ of a liter of paint in an old can. Sandy kicked the can and spilled $\frac{1}{4}$ of a liter. How much of a liter of paint was left in the can?

Answer:

Problem:

Pat and Sandy painted the trim of the shed blue. They started with $\frac{1}{2}$ of a can of blue paint. They finished with $\frac{1}{5}$ of a can. How much of the can of blue paint did they use?

Answer:

Problem:

Here is another way to write addition and subtraction problems:

$$\frac{2}{5} + \frac{1}{4} =$$

Follow the same four steps.

Step 1 Find the least common denominator.

$$\frac{2}{5} + \frac{1}{4} =$$

(1) LCD is 20.

Step 2 Rename both fractions using the LCD.

$$\frac{2}{5} + \frac{1}{4} = \frac{\quad}{20} + \frac{\quad}{20}$$

Step 3 Find the missing numerators to make equal fractions.

$$\frac{2^{x4}}{5^{x4}} + \frac{1^{x5}}{4^{x5}} = \frac{8}{20} + \frac{5}{20}$$

Step 4 Add or subtract fractions with a common denominator.

$$\frac{2^{x4}}{5^{x4}} + \frac{1^{x5}}{4^{x5}} = \frac{8}{20} + \frac{5}{20} = \frac{13}{20}$$

Add or subtract. Express your answer in simplest form.

LCD is ____.

$$\frac{1}{9} + \frac{1}{6} =$$

LCD is ____.

$$\frac{4}{9} + \frac{1}{2} =$$

LCD is ____.

$$\frac{5}{7} - \frac{1}{2} =$$

LCD is ____.

$$\frac{3}{10} - \frac{1}{6} =$$

Add or subtract. Express your answer in simplest form.

$$\frac{5^{x1}}{14^{x1}} + \frac{1^{x7}}{2^{x7}} = \frac{5}{14} + \frac{7}{14} = \frac{12}{14} = \frac{6}{7}$$

$$\frac{5}{12} + \frac{1}{4} =$$

$$\frac{4}{7} + \frac{1}{3} =$$

$$\frac{5}{6} + \frac{1}{10} =$$

$$\frac{8}{9} - \frac{1}{2} =$$

$$\frac{7}{10} - \frac{1}{5} =$$

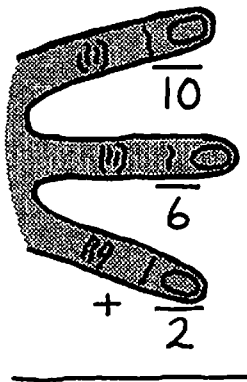
$$\frac{6}{9} - \frac{1}{4} =$$

$$\frac{5}{6} - \frac{1}{4} =$$

Finding the Least Common Denominator of Three Fractions

Here are the steps to find the least common denominator of three fractions:

1. Pick the largest denominator.
2. Start listing its multiples.
3. After you list each multiple ask, "Is this also a multiple of each of the other two denominators?"
4. As soon as you answer "yes" for both, stop. You have found the least common denominator.



List each multiple of 10: 10, 20, 30

Is this a multiple of 6? no, no, yes

Is this a multiple of 2? yes, yes, yes

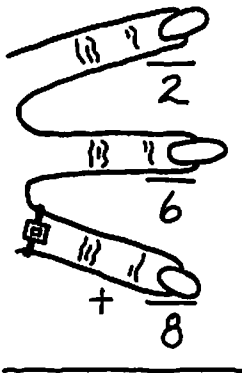
LCD is 30.

List each multiple of 8: 8, 16,

Is this a multiple of 6? no, ,

Is this a multiple of 2? yes, ,

LCD is .

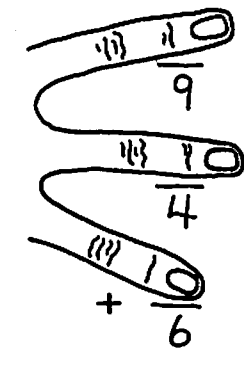


List each multiple of 9: , , ,

Is this a multiple of 6? , , ,

Is this a multiple of 4? , , ,

LCD is .



Adding Three Fractions with Different Denominators

To add three fractions with different denominators, you start by finding the least common denominator of the three fractions. This is the hard part. The rest of the job is easy.

List each multiple of 5: 5, 10, 15, 20

Is this a multiple of 4? no, no, no, yes

Is this a multiple of 2? no, yes, no, yes

LCD is 20.

$$\begin{array}{r} \frac{1 \times 5}{4 \times 5} = \frac{5}{20} \\ \frac{1 \times 10}{2 \times 10} = \frac{10}{20} \\ + \frac{1 \times 4}{5 \times 4} = \frac{4}{20} \\ \hline \frac{19}{20} \end{array}$$

List each multiple of 6: 6,

Is this a multiple of 4? no,

Is this a multiple of 3? ,

LCD is .

$$\begin{array}{r} \frac{1}{6} = \frac{\quad}{12} \\ \frac{1}{3} = \frac{\quad}{\quad} \\ + \frac{1}{4} = \frac{\quad}{\quad} \\ \hline \end{array}$$

List each multiple of 6:

Is this a multiple of 5?

Is this a multiple of 3?

LCD is .

$$\begin{array}{r} \frac{2}{5} \\ \frac{1}{6} \\ + \frac{1}{3} \\ \hline \end{array}$$

List each multiple of 10:

Is this a multiple of 5?

Is this a multiple of 4?

LCD is .

$$\begin{array}{r} \frac{1}{10} \\ \frac{2}{5} \\ + \frac{1}{4} \\ \hline \end{array}$$

Add. Express your answer in simplest form.

$$\begin{array}{r} \frac{1}{6} \\ \frac{2}{3} \\ + \frac{1}{9} \\ \hline \end{array}$$

$$\begin{array}{r} \frac{1}{5} \\ \frac{3}{10} \\ + \frac{1}{4} \\ \hline \end{array}$$

$$\begin{array}{r} \frac{1}{8} \\ \frac{2}{3} \\ + \frac{1}{6} \\ \hline \end{array}$$

$$\begin{array}{r} \frac{1}{2} \\ \frac{1}{4} \\ + \frac{1}{8} \\ \hline \end{array}$$

$$\begin{array}{r} \frac{2}{7} \\ \frac{1}{2} \\ + \frac{1}{14} \\ \hline \end{array}$$

$$\begin{array}{r} \frac{1}{4} \\ \frac{3}{8} \\ + \frac{1}{16} \\ \hline \end{array}$$

Adding, Subtracting, Multiplying and Dividing with Different Denominators

$$\frac{1 \times 5}{7 \times 5} + \frac{4 \times 7}{5 \times 7} = \frac{5}{35} + \frac{28}{35} = \frac{33}{35}$$

$$\frac{3}{4} + \frac{1}{10} =$$

$$\frac{1}{7} \times \frac{4}{5} = \frac{4}{35}$$

$$\frac{3}{4} - \frac{1}{10} =$$

$$\frac{1}{7} \div \frac{4}{5} = \frac{1}{7} \times \frac{5}{4} = \frac{5}{28}$$

$$\frac{3}{4} \times \frac{1}{10} =$$

$$\frac{5}{9} - \frac{1}{3} =$$

$$\frac{1}{2} + \frac{1}{3} =$$

$$\frac{5}{9} \times \frac{1}{3}$$

$$\frac{1}{2} - \frac{1}{3} =$$

$$\frac{5}{9} + \frac{1}{3}$$

$$\frac{1}{2} \times \frac{1}{3} =$$

$$\frac{1}{8} \times \frac{5}{6} =$$

$$\frac{2}{11} \div \frac{2}{5} =$$

$$\frac{1}{8} \div \frac{5}{6} =$$

$$\frac{2}{11} + \frac{2}{5} =$$

$$\frac{1}{8} + \frac{5}{6} =$$

$$\frac{2}{11} \times \frac{2}{5} =$$

Practice Test - Key To Fractions Book 3

Name _____

Date _____

Simplify.

$$\frac{8}{12} = \quad \frac{10}{12} =$$

Multiply.

$$\frac{2}{7} \times \frac{5}{9} =$$

Divide.

$$\frac{2}{9} \div \frac{1}{4} =$$

Add or subtract.

$$\frac{1}{5} + \frac{2}{5} =$$

$$\frac{4}{7} - \frac{3}{7} =$$

$$\frac{9}{13} - \frac{5}{13} =$$

$$\frac{1}{9} + \frac{5}{9} - \frac{2}{9} =$$

$$\begin{array}{r} \frac{7}{25} \\ + \frac{9}{25} \\ \hline \end{array}$$

$$\begin{array}{r} \frac{16}{21} \\ - \frac{8}{21} \\ \hline \end{array}$$

Add or subtract and then simplify.

$$\frac{3}{8} + \frac{1}{8} =$$

$$\frac{5}{21} + \frac{5}{21} + \frac{4}{21} =$$

$$\frac{23}{25} - \frac{3}{25} =$$

$$\frac{11}{16} - \left(\frac{1}{16} + \frac{1}{16} + \frac{1}{16} \right) =$$

List the first multiples of 6: _____, _____, _____, _____, _____, _____, _____, _____, _____, _____.

List the first multiples of 4: _____, _____, _____, _____, _____, _____, _____, _____, _____, _____.

Circle the common multiples of 6 and 4. The least common multiple is _____.

Find the least common denominator.

$$\frac{\text{10}}{5} - \frac{\text{10}}{4} \quad \text{LCD is } \underline{\quad\quad\quad}.$$

$$\frac{\text{11}}{2} + \frac{\text{10}}{6} \quad \text{LCD is } \underline{\quad\quad\quad}.$$

$$\begin{array}{r} \frac{\text{11}}{7} \\ - \frac{\text{10}}{4} \\ \hline \end{array} \quad \text{LCD is } \underline{\quad\quad\quad}.$$

Practice Test - Page 2

Add or subtract.

LCD is ____.

$$\begin{array}{r} \frac{3}{8} \\ + \frac{1}{4} \\ \hline \end{array}$$

$$\begin{array}{r} \frac{5}{6} \\ - \frac{2}{9} \\ \hline \end{array}$$

$$\begin{array}{r} \frac{1}{4} \\ + \frac{2}{3} \\ \hline \end{array}$$

Pat and Sandy got paid for painting the shed. Paint had cost them $\frac{1}{5}$ of their pay. Brushes had cost them $\frac{1}{10}$. What fraction of their pay had Pat and Sandy spent on supplies?

Problem:

Add $\frac{3}{8}$ and $\frac{1}{6}$.

Answer:

Add or subtract. Express your answer in simplest form.

$$\begin{array}{r} \frac{11}{12} \\ - \frac{2}{3} \\ \hline \end{array}$$

$$\begin{array}{r} \frac{2}{15} \\ + \frac{1}{6} \\ + \frac{3}{10} \\ \hline \end{array}$$

$$\frac{3}{7} + \frac{1}{2} =$$

$$\frac{14}{15} - \frac{1}{3} =$$

Key to Fractions®

Book 1: *Fraction Concepts*
Book 2: *Multiplying and Dividing*
Book 3: *Adding and Subtracting*
Book 4: *Mixed Numbers*
Answers and Notes for Books 1–4
Reproducible Tests for Books 1–4

Also Available

Key to Decimals®
Key to Percents®
Key to Algebra®
Key to Geometry®
Key to Measurement®
Key to Metric Measurement®



KEY CURRICULUM PRESS
Innovators in Mathematics Education



100% PCW

ISBN 0-913684-93-7



9 0000>

9 780913 684931